

Name: _____

Date: _____

1. Factor each of the following fully.

a. $6x^2y^2 - 3x^6y + 4x^2y$

$$x^2y(6y - 3x^4 + 4)$$

b. $x^2 + x - 30$

$$(x-5)(x+6)$$

c. $2x^2 + 6x + 4$

$$2(x+1)(x+2)$$

d. $5x^2 - 13x - 6$

$$(5x+2)(x-3)$$

2. Expand each of the following.

a. $(x-4)(x+1)$

$$x^2 - 3x - 4$$

b. $(3x-14)(-5x+2)$

$$-15x^2 + 76x - 28$$

3. Use exponent rules to simplify. Show all work.

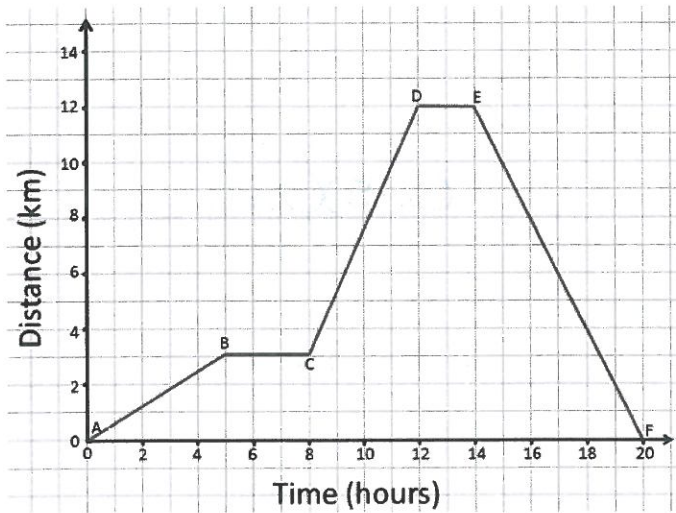
a. $\frac{(a^3b^2)(a^{-2}b^3)}{(a^2b)}$

$$\frac{b^4}{a^1}$$

b. $\left(\frac{a^{-2}b^8}{a^2b^3}\right)^{-2}$

$$\frac{a^8}{b^{10}}$$

4. Describe a real-life situation that fits this graph.



AB: Move 3 km in 5 hrs

BC: Stay there for 3 hrs

CD: Move 9 km in 4 hrs

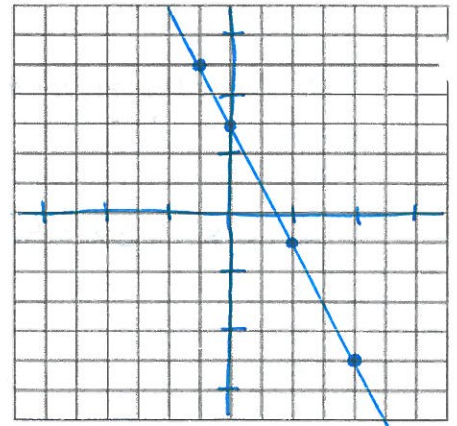
DE: Stay there for 2 hrs

EF: Move 12 km back in 6 hrs

5. Complete the table of values using the equation, then graph the data.

$$f(x) = -2x + 3$$

x	y
-1	5
0	3
2	-1
4	-5



CHAPTER 6 – LINEAR FUNCTIONS

6. Identify the following components of the graph provided...

a. X-Intercept:

$$x = -3$$

b. Slope:

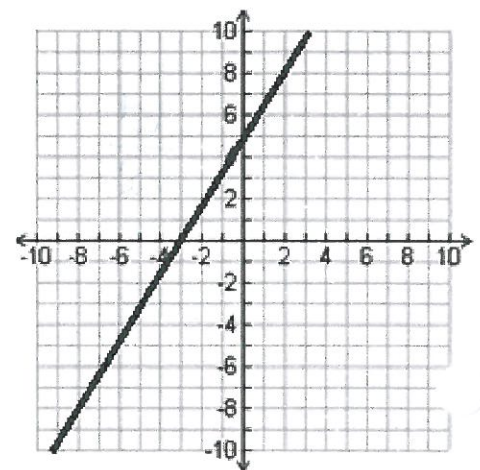
$$\text{slope} = \frac{5}{3} = 1.67$$

c. Y-Intercept:

$$y = 5$$

d. Equation of the line:

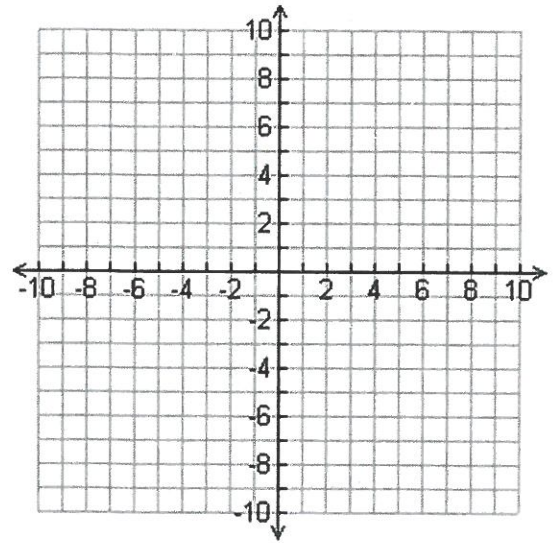
$$y = \frac{5}{3}x + 5$$



7. Solve this system of equations by graphing.

Equation A:
 $y = \frac{3}{2}x - 7$

Equation B:
 $y + 3 = -2(x - 5)$



Solution: (4, -1)

8. Solve this system of equations using elimination or substitution.

$$3x - 2y = 6$$

$$2x + 4y = 20$$

Solution: (4, 3)

